

PRE UPPER PRIMARY SCHOLARSHIP EXAMINATION (Std. 5th), FEBRUARY 2025

Seat No.

--	--	--	--	--	--	--	--	--	--

Set



0 5 0 2

Paper No. II

Time : 02:00 to 03:30

Medium : English



Total Marks : 150

Third Language and Intelligence Test

Pages : 16

Read the following instructions carefully before you answer the questions.

- (1) This question paper contains **two** sections. In Section **I** there are **1** to **25** questions of Third Language and in Section **II** there are **26** to **75** questions of Intelligence Test. All **75** questions are compulsory.

- (2) All questions carry **2** marks each.

- (3) Time limit to solve the question paper is **90** minutes.

- (4) Separate answer sheet is given to record the answers. Each question has been given four alternatives. Read them carefully. Select and darken the correct answer in the answer sheet.

For Example :- If the correct alternative for Q. No. 6 is 2, then record your answer as follows :
Question No. 6 - ① ● ③ ④

- (5) Answer recorded in any other form will not be considered. Such answer will be credited with 'Zero' mark. ✓ ② ● ✗

- (6) Use blue or black ball pen to darken the circle. Circles darkened by pencil will not be credited.

- (7) If more than one circles are darkened or overwriting is done, the answer will not be accepted.

- (8) Answer once recorded can not be changed.

- (9) The rough work is to be done in the space given under each page or on the last page of the question paper.

- (10) The exam has limited time, in case you are not able to solve a question, kindly solve the next question. In the end if time permits you can try to solve the unsolved questions.

- (11) If incomplete or wrong question found in a question paper, you are not permitted to ask the same to Supervisor or Centre Incharge.

- (12) School or parents should not send written application to Block Education Officer or Education Officer for any error, mistake or objection issues. These error / mistake / objection issues should be registered online through respective school login only.

- (13) The error / mistake / objection issues should be registered online within 10 - days from the publication of Interim answer key on MSCE website.

- (14) Suggestion and decision of expert committee will be applicable on printing or any other mistake in question paper.

विभाग - I

मराठी

01. उंचावरून पडणारा पाण्याचा प्रवाह -
(1) डोह (2) नदी (3) झरा (4) धबधबा
02. विरुद्धार्थी शब्दांची अचूक जोडी कोणती?
(1) मोकळा × रिकामा (2) प्रखर × सौम्य
(3) रात्र × उदय (4) शत्रू × वैरी
03. 75 वर्षे पूर्ण झाल्यावर साजरा होणारा महोत्सव -
(1) सुवर्ण (2) रौप्य (3) अमृत (4) हीरक
04. 'दंड' या शब्दाचा अर्थ होत नाही, असा पर्याय कोणता?
(1) शिक्षा (2) काठी (3) बाहू (4) धड
05. जसे 'साधाभोळा' तसे 'भोळा _____' (योग्य जोडशब्दाचा पर्याय निवडा.)
(1) भाबडा (2) पांगळा (3) गबाळा (4) रावळा
06. 'धा ड ट ध क' या अक्षरांपासून तयार होणाऱ्या अर्थपूर्ण शब्दातील पाचवे अक्षर कोणते?
(1) धा (2) ड (3) क (4) ट
07. पुढे दिलेल्या वाक्यांतील कोणत्या वाक्यात नाम आले नाही?
(1) त्याने गुढी उभारली. (2) आपण घरी यावे.
(3) तू लवकर पोहोच. (4) आम्ही गाणे म्हटले.

कच्च्या कामासाठी फक्त

08. दिलेल्या वाक्यातील अधोरेखित शब्दाचे लिंग ओळखा.
'सायंकाळ होताच गडाचे दरवाजे बंद झाले'.
- (1) नपुंसकलिंग (2) स्त्रीलिंग
(3) पुल्लिंग (4) उभयलिंगी
09. दिलेल्या विधानातील क्रियापद ओळखा:
'सकाळच्या वेळी पक्षी गातील सुरात'.
- (1) वेळी (2) गातील
(3) सुरात (4) पक्षी
10. पुढीलपैकी निश्चितपणे एकवचनी नाम कोणते?
- (1) कोळी (2) माळी (3) जाळी (4) तळी
11. पुढे दिलेल्या कोणत्या वाक्याच्या शेवटी पूर्णविराम येईल?
- (1) काय रे बाबा, कपडे आणलेस का
(2) तुझा प्रामाणिकपणा मला आवडला
(3) कपाटातील पैसे गेले कुठे
(4) एवढ्या सामानाला किती रूपये लागले गं आई
12. अशुद्ध शब्द पर्यायांतून निवडा.
- (1) बक्षिस (2) धुऊन
(3) भीती (4) हुतुतू
13. 'खेळातील स्वयंपाक' या कवितेचे कवी कोण आहेत?
- (1) बबन शिंदे (2) किशोर पाठक
(3) शंकर विटणकर (4) विंदा करंदीकर

कच्च्या कामासाठी फक्त

प्रश्न - 14 ते 16 साठी सूचना :-

पुढील उतारा काळजीपूर्वक वाचा. त्याखालील प्रश्नांच्या उत्तराचा अचूक पर्याय निवडा.

निसर्गाची नानाविधरूपे आपल्याला पाहायला मिळतात. प्रत्येक ऋतूत निसर्गाचे रूप बदलत असते. त्याचा मानवाप्रमाणेच सर्व सजीवांना आपल्या विकासासाठी उपयोग होतो. तो निरपेक्षपणे आपले सर्वस्व प्राणीमात्रांना बहाल करतो. आपले तर जीवनच पूर्णतः निसर्गावर अवलंबून आहे. वनस्पती फळे, फुले, निवाऱ्यासाठी लाकडे, शुद्ध हवा एवढेच नव्हे तर उन्हाच्या झळांपासून संरक्षणासाठी सावली सुद्धा देतात. औषधी वनस्पती, इमारती लाकडासाठीच्या वनस्पती, कापडासाठी कापूस देणारी पिके, कागद, रबरी वस्तू बनवण्यासाठी उपयोगी वृक्ष या प्रमाणेच इंधनासाठी लाकडे देणाऱ्या वनस्पतीच असतात.

वनस्पतीप्रमाणेच प्राण्यांचाही माणसाला खूप उपयोग होतो. अन्नातील दूध, मांस, अंडी यांसारखे पदार्थ, वाहतुकीसाठी उपयोगी पडणारे प्राणी केस किंवा चामड्याच्या वस्तूंसुद्धा प्राण्यांपासून मिळतात. समुद्रातील मासे, शंखशिंपले किंवा मीठ सुद्धा आवश्यकच आहे. पाऊस तर सर्वच सजीवांचे जीवन फुलवतो. नद्यांचा प्रवाह शेतीवाडीला संजीवनी देतो. काही ठिकाणी नद्यांचा अंतर्गत वाहतुकीसाठी उपयोग होतो. खरोखर निसर्ग मानवाचा खराखुरा मित्रच आहे.

14. उताऱ्यातील वर्णनानुसार हवेच्या शुद्धीकरणात पुढीलपैकी कोणाची भूमिका महत्त्वाची आहे?

- | | |
|-----------|----------|
| (1) झाडे | (2) पाऊस |
| (3) नद्या | (4) मानव |

15. कपडे तयार करण्यासाठी उताऱ्यातील वर्णनानुसार कशाचा उपयोग होतो?

- | | |
|-------------------|-----------------|
| (1) झाडाच्या साली | (2) झाडाची पाने |
| (3) कापूस | (4) कातडी |

16. उताऱ्यातील वर्णनानुसार सर्व सजीवांच्या जीवनमानावर परिणाम करणारी बाब कोणती?

- | | |
|-----------|------------|
| (1) नद्या | (2) समुद्र |
| (3) इमारत | (4) पाऊस |

कच्च्या कामासाठी फक्त

प्रश्न – 17 ते 19 साठी सूचना :-

पुढील कविता काळजीपूर्वक वाचा. त्याखालील प्रश्नांच्या उत्तराचा योग्य पर्याय निवडा.

फुलगानी गाईली याने आणि त्याने
आता जरा गाईन मी पानांचे गाणे
झाडांच्या माथ्यावर पानांचा डेरा
फांदीच्या टोकाशी पानकोवळा तुरा
आंब्याची पालवी जांभळी आणि लाल
जसे काही यशोदेच्या बाळाचे गाल
केळीच्या पानांतून सनईचे सूर
पक्वानांचा थाट, उदबत्त्यांचा धूर
पिंपळाच्या पानांचे नाजुक नाजुक तळवे
विड्यांचे पान तर रंगदार हळवे
पानांच्या सावलीत गुरे झोपा घेतात
पोळलेले पाय कसे थंडगार होतात.
जाळीदार पान आहे पुस्तकात जपून
रेषांतून वाचतो जुन्या आठवणी जपून

17. कवितेतील आशयानुसार तुरा कोठे मिरवत आहे?

- | | |
|------------|----------------------|
| (1) डोईवर | (2) फांदीच्या टोकावर |
| (3) पानावर | (4) बाळाच्या गालावर |

18. जेवणावळीत कोणत्या पानाला महत्त्व आहे?

- | | |
|----------------|----------------|
| (1) पिंपळाच्या | (2) आंब्याच्या |
| (3) केळीच्या | (4) जांभळीच्या |

कच्च्या कामासाठी फक्त

19. कवितेतील वर्णनानुसार असत्य विधान कोणते ?
 (1) पानांच्या सावलीत गुरे विश्रांती घेतात.
 (2) थंडगार पाय भाजून निघतात.
 (3) विड्यांची पाने रंगदार असतात.
 (4) बाळाचे गाल लाल असतात.
20. 'कोल्हा काकडीला राजी' या म्हणीचा अर्थ पर्यायांतून निवडा.
 (1) मुळचा स्वभाव कधीच बदलत नाही.
 (2) आडाण्याला चांगल्या वस्तूचे मोल कळत नाही.
 (3) निरुद्योगी माणूस सर्वांना भारभूत होतो.
 (4) क्षुल्लक वस्तूच्या प्राप्तीने सामान्य लोक संतुष्ट होतात.
21. पुढे दिलेल्या वाक्यपूर्तीसाठी योग्य वाक्प्रचाराची निवड करा.
 आमच्या वर्गाचा निश्चित झालेला लंगडीचा सामना अचानक रद्द झाल्याने मुलांच्या उत्साहावर _____ .
 (1) पाणी सोडणे (2) पाण्यात पाहणे (3) पाणी पाजणे (4) पाणी पडणे
22. प्राणी व त्यांचा निवारा यांत अयोग्य जोडी कोणती ?
 (1) सिंह - गुहा (2) घुबड - जाळी (3) पोपट - ढोली (4) उंदीर - बीळ
23. रिकाम्या जागी योग्य समूहदर्शक शब्द पर्यायांतून निवडा.
 'मळणी केल्यानंतर शेतकऱ्याने खिल्लारांसाठी गवताची _____ रचली'.
 (1) जुडी (2) जाळी (3) गंजी (4) चवड
24. ध्वनिदर्शक शब्दांत अयोग्य पर्याय कोणता ?
 (1) डासांची - भुणभुण (2) पंखांची - फडफड
 (3) पानांची - सळसळ (4) बांगड्यांची - छुमछुम
25. 'रहस्य' या शब्दासाठी योग्य समानार्थी शब्द निवडा:
 (1) गम्य (2) कथा (3) गुपित (4) दुर्गम


कच्च्या कामासाठी फक्त

A	B	C	D	E	F	G	H	I	J	K	L	M	N	O	P	Q	R	S	T	U	V	W	X	Y
---	---	---	---	---	---	---	---	---	---	---	---	---	---	---	---	---	---	---	---	---	---	---	---	---


SECTION - II

INTELLIGENCE TEST


26.




The net of a cube-shaped dice is given alongside. If a dice is made by folding this net, which of the following shape will it definitely not resemble?




(1)



(2)



(3)




(4)

Q. 27 and Q. 28 Direction :

Select the mirror image of each of the following question figure from the alternatives given.

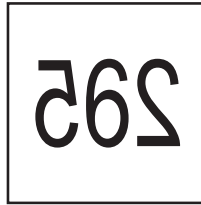
27. **Question Figure :**



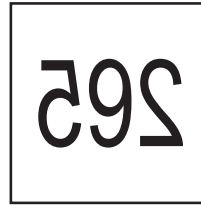
Answer Figures :




(1)



(2)



(3)



(4)

28. **Question Figure :**



Answer Figures :



(1)



(2)



(3)



(4)


SPACE FOR ROUGH WORK

A	B	C	D	E	F	G	H	I	J	K	L	M	N	O	P	Q	R	S	T	U	V	W	X	Y
---	---	---	---	---	---	---	---	---	---	---	---	---	---	---	---	---	---	---	---	---	---	---	---	---

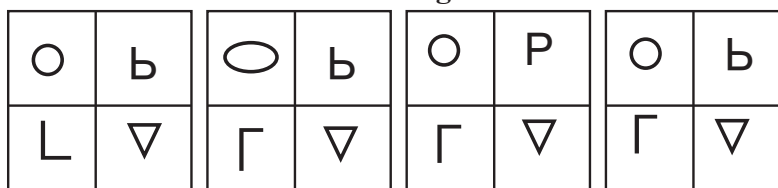
Q. 29 and Q. 30 Direction :

Select the water image of each of the following question figure from the alternatives given.

29. Question Figure :



Answer Figures :




(1)

(2)

(3)

(4)

30. Question Figure :



Answer Figures :



(1)

(2)

(3)

(4)

Q. 31 to Q. 35 Direction :

In the following questions the first and second term have a specific relation between them. The same relationship exists between the third and the fourth term. Find the correct alternative to replace the question mark.

31. Devrai : Maharashtra :: Sharanvan : ?

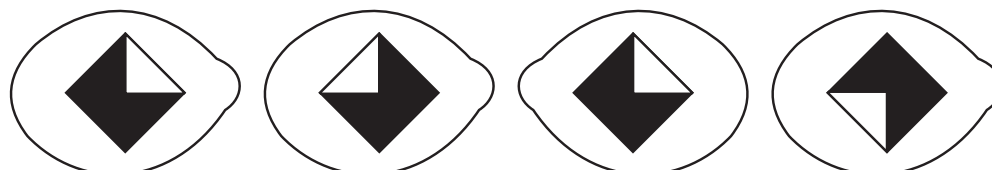
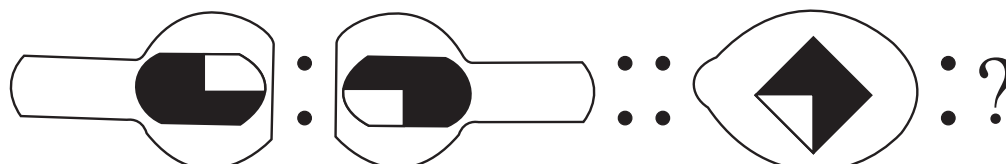
(1) Rajsthan

(2) Madhy Pradesh

(3) Gujrat

(4) Uttar Pradesh

32.



(1)

(2)

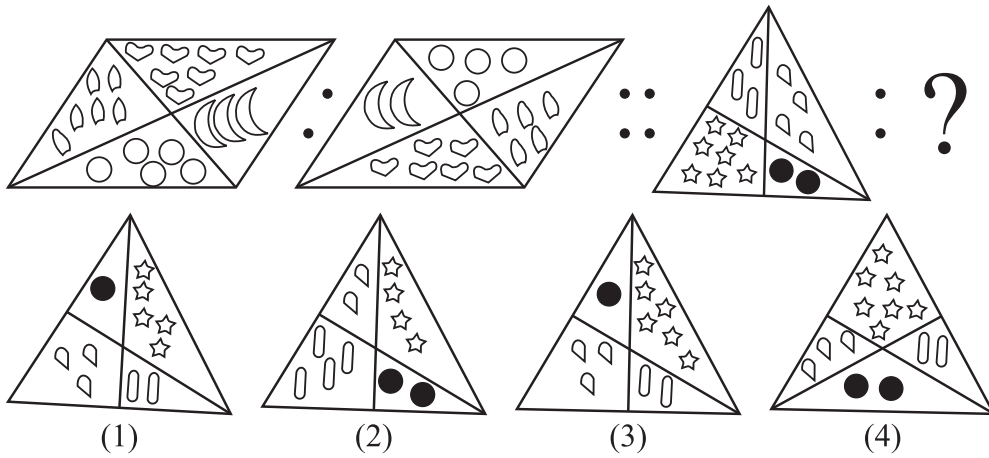
(3)

(4)

SPACE FOR ROUGH WORK

A	B	C	D	E	F	G	H	I	J	K	L	M	N	O	P	Q	R	S	T	U	V	W	X	Y
---	---	---	---	---	---	---	---	---	---	---	---	---	---	---	---	---	---	---	---	---	---	---	---	---

33.



34. $11 : 110 :: 13 : ?$

(1) 166

(2) 129

(3) 165

(4) 156

35. $\frac{5}{9} : \frac{19}{14} :: \frac{4}{7} : ?$

(1) $\frac{14}{5}$

(2) $\frac{12}{11}$

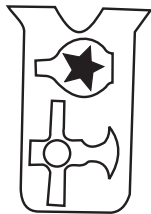
(3) $\frac{11}{12}$

(4) $\frac{18}{11}$

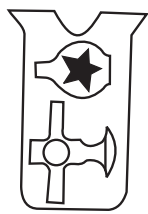
Q. 36 and Q. 37 Direction :

Select the identical figure to the question figure from the options.


36. **Question Figure :**




Answer Figures :




(1)



(2)



(3)



(4)

37. **Question Figure :**



Answer Figures :



(1)



(2)



(3)



(4)

SPACE FOR ROUGH WORK

-

-

-

- (1) Sunday (2) Friday (3) Thursday (4) Saturday

-

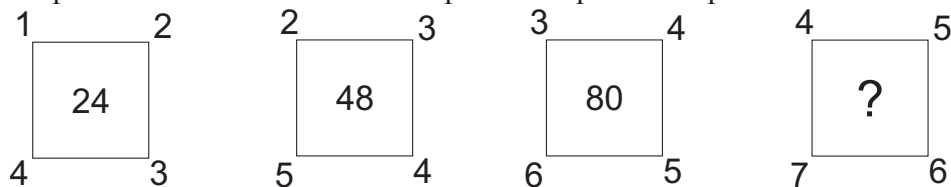
In the given venn diagram the number of students who play Kho-Kho are shown in triangle, those who play carrom are shown in rectangle and those who play Langadi are shown in Circle.

(1) more by 8 (2) more by 5 (3) less by 8 (4) less by 6

SPACE FOR ROUGH WORK

A	B	C	D	E	F	G	H	I	J	K	L	M	N	O	P	Q	R	S	T	U	V	W	X	Y
---	---	---	---	---	---	---	---	---	---	---	---	---	---	---	---	---	---	---	---	---	---	---	---	---

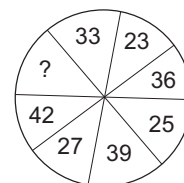
44. Identify the pattern and select the correct option to replace the question mark.



- (1) 110 (2) 121 (3) 120 (4) 101

45. Identify the pattern and select the correct option to replace the question Mark.

- (1) 34 (2) 30
(3) 32 (4) 29



Q. 46 to Q. 50 Direction :

A set of terms is given at the beginning of the question. These terms have some common characteristic. Find out the term from the alternatives that matches the given set of terms.

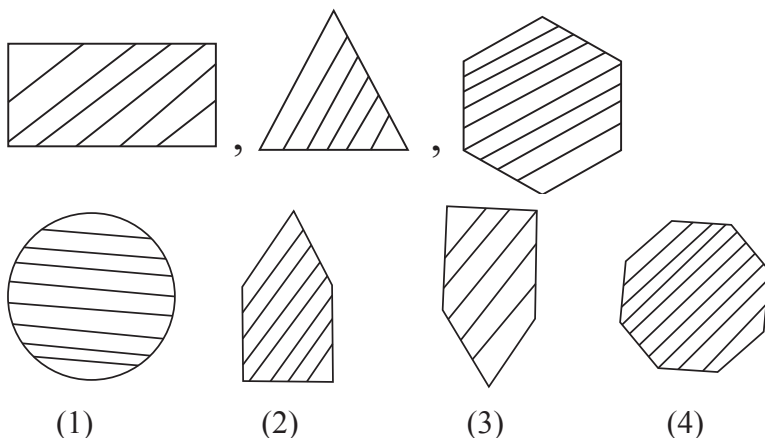
46. Mars, Venus, Jupiter, _____

- (1) Satellite (2) Moon (3) Saturn (4) Star

47. Amoeba, Earthworm, Cockroach, _____

- (1) Lizard (2) Snake (3) Crow (4) Snail

- 48.



49. (73, 71), (61, 59), (31, 29), _____

- (1) (19, 17) (2) (23, 21) (3) (41, 39) (4) (31, 33)

SPACE FOR ROUGH WORK

A	B	C	D	E	F	G	H	I	J	K	L	M	N	O	P	Q	R	S	T	U	V	W	X	Y
---	---	---	---	---	---	---	---	---	---	---	---	---	---	---	---	---	---	---	---	---	---	---	---	---

50. 28, 10, 91, _____
 (1) 12 (2) 78 (3) 54 (4) 87
51. In a certain code language if 723 = 6, 392 = 9, 418 = 5, then 235 = ?
 (1) 3 (2) 2 (3) 5 (4) 7
52. In a certain code language if TALE = 4572, SAFE = 6052 and NOTE = 5731, then SLATE = ?
 (Note : Letters and numerals are not in order.)
 (1) 30275 (2) 46075 (3) 64275 (4) 40635

Q. 53 and Q. 54 Direction :

Observe the table of numbers and symbols and answer the questions given below.

Numbers	5	3	8	0	6	2
Symbol	⊗	△	●	@	#	□

53. ● plus # divide □ minus ⊗ = ?
 (1) □ (2) # (3) ⊗ (4) @
54. Using the given digits only once, which group of symbols will represent the smallest six digit number?
 (1) @ □ △ ⊗ # ● (2) □ @ △ ⊗ ● #
 (3) □ @ △ ⊗ # ● (4) □ @ △ # ⊗ ●
55. During drawing period if water is spilt on your drawing due to your mistake then what will you do?
 (1) I will cry.
 (2) I will lie to the teacher that my friend has spilt the water.
 (3) I will start new drawing again.
 (4) I will blame my friend.
56. While following government rules during Corona Pandemic, whose action is incorrect?
 (1) Parnika Sanitizes all the things which are brought at home from outside.
 (2) Krushna follows social distancing when he stands at crowded place.
 (3) Vaibhav doesn't leave house unnecessary.
 (4) Vidya uses her mask while going outside. But after returning home she moves around in the house without washing her hands and legs.

SPACE FOR ROUGH WORK

A	B	C	D	E	F	G	H	I	J	K	L	M	N	O	P	Q	R	S	T	U	V	W	X	Y
---	---	---	---	---	---	---	---	---	---	---	---	---	---	---	---	---	---	---	---	---	---	---	---	---

57.

V, S, R, V, R, M, G, V, R, S, M, V

In the above letter series, which letter has occurred maximum number of times?

- (1) R (2) M (3) V (4) S

58. Arrange the letters 'O, G, T, U, N, E' to make a meaningful word. Which letter will be at fourth place from the right?

- (1) G (2) N (3) U (4) T

59.

52, 41, 74, 63, 18, 94, 35, 46

By interchanging the digits of the numbers in the above number series how many odd square numbers will be formed?

- (1) 3 (2) 5 (3) 6 (4) 4

60.

ABCDE FGHIJ KLMNO PQRST UVWXY

Which letter will be at the middle position in the meaningful word formed by taking letters at the 12th, 18th and 21st position from the right side in the given alphabetical series?

- (1) E (2) L (3) H (4) N


Q. 61 to Q. 65 Direction :

Select the odd term.

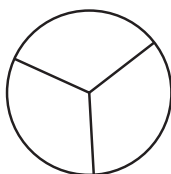
61. (1) Flock (2) Bunch (3) Dozen (4) Group

62. (1) Mumbai (2) Kolkata (3) Jaipur (4) Nagpur

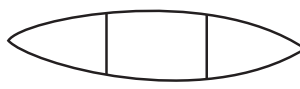
63.



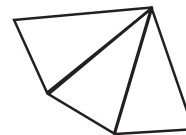
(1)



(2)



(3)

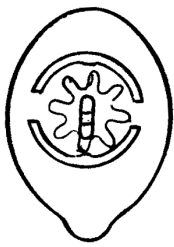


(4)

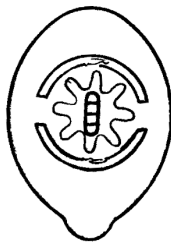
SPACE FOR ROUGH WORK

A	B	C	D	E	F	G	H	I	J	K	L	M	N	O	P	Q	R	S	T	U	V	W	X	Y
---	---	---	---	---	---	---	---	---	---	---	---	---	---	---	---	---	---	---	---	---	---	---	---	---

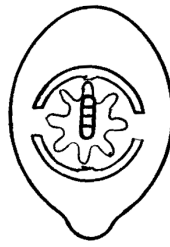
64.




(1)



(2)



(3)



(4)

65.

(1) 4415

(2) 2204

(3) 3254

(4) 2313

66.

Select the correct alternative to replace the question mark in the given number series.

6, 13, 32, 69, 130, ?

(1) 348

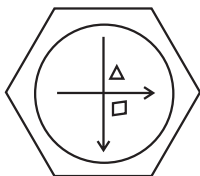
(2) 734

(3) 221

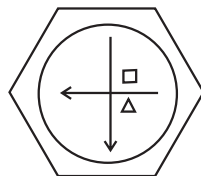
(4) 517

67.

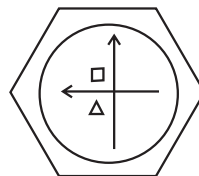
In the given figures there is a specific order. Observe the order and find out the figure to replace the question mark.



,

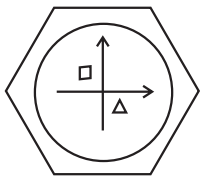


,

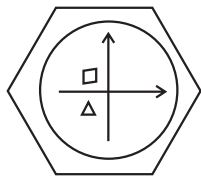


,

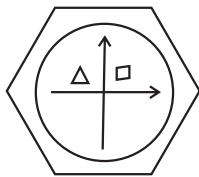
?



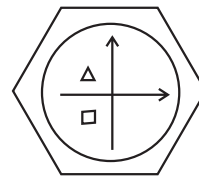
(1)



(2)



(3)



(4)

68.

Which group of symbols will occur at the place of question marks in the given series of symbols?

<+>?○>△?<+○<?>△?>△○<△?<+>

(1) △<++○

(2) △○++○

(3) +><△○

(4) ○<>△+

69.

Find the wrong term in the given number series.

117, 161, 207, 253, 299

(1) 253

(2) 161

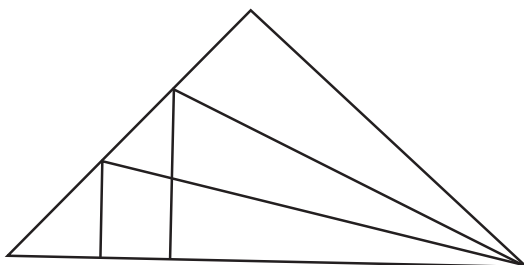
(3) 117

(4) 299

SPACE FOR ROUGH WORK


A	B	C	D	E	F	G	H	I	J	K	L	M	N	O	P	Q	R	S	T	U	V	W	X	Y
---	---	---	---	---	---	---	---	---	---	---	---	---	---	---	---	---	---	---	---	---	---	---	---	---

70. Find the wrong term in the given number series.
170, 178, 194, 206, 218
(1) 218 (2) 178 (3) 194 (4) 206
71. Seema is older than Reema by 7 years. Sum of their today's ages is 53 years. What will be seema's age after six years?
(1) 36 years (2) 30 years (3) 29 years (4) 34 years
72. Ananya is taller than Akanksha but shorter than Anushka. Anushka is shorter than Arya and taller than Ananya. Who is the tallest among them?
(1) Anushka (2) Arya (3) Ananya (4) Akanksha
73. Manav has 5 maternal aunts and 4 maternal uncles. One of his maternal aunt is a teacher. The maternal aunt who is a teacher has how many sisters and brothers respectively?
(1) 6 and 4 (2) 4 and 5 (3) 5 and 4 (4) 4 and 6
74. Find the number of triangles in the given figure.



- (1) 11
(2) 14
(3) 12
(4) 13

75. Find the total number of squares in the given figure.



- (1) 10
(2) 13
(3) 14
(4) 12

SPACE FOR ROUGH WORK

SPACE FOR ROUGH WORK